

Total Pages - 2+2 MAP

UG/1st Sem/GEOL(H)/Pr/2019

2019

B. Sc.

1st Semester Examination

GEOLOGY (Honours)

Paper : C 1-P

(Practical)

Full Marks : 20

Time : 3 Hours

Candidates are required to give their answers in their own words as far as practicable.

The figures in the margin indicate full marks.

Answer all questions.

(Earth System Science Lab)

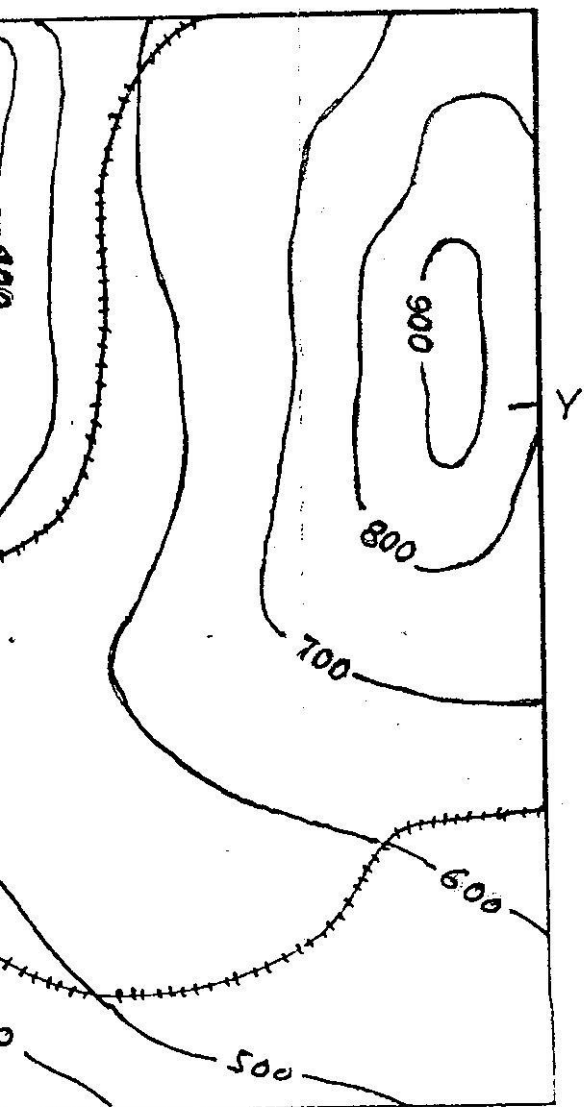
1. Interpret the given lithological map and mention the number of Lithounits and find out the dip of the lithounits with the help of rule of Vs. (Map attached)
Map 'A'. 5
2. Draw a profile section of the given contour map and

give physiographic description of this area. (Map attached) Map 'B' 5

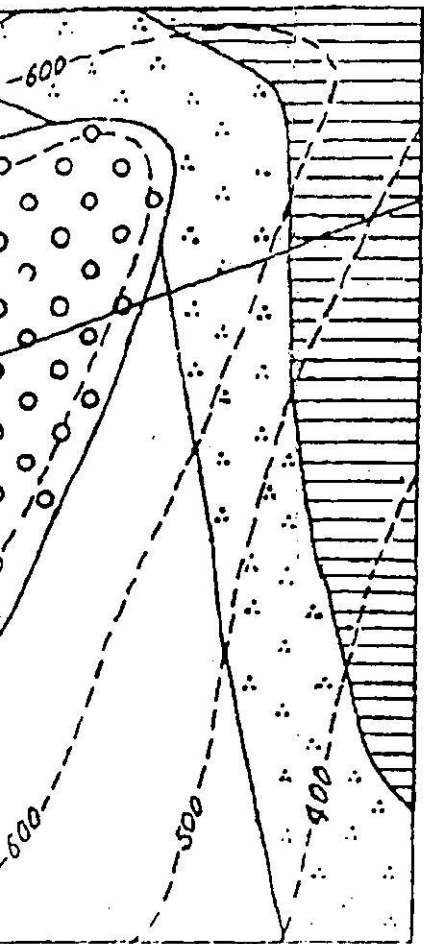
3. Mark the cratons, mobile belts and sedimentary basins on the given map of India. 5

4. Laboratory note book. 2



5. Viva-voce. 3



Contour . . .

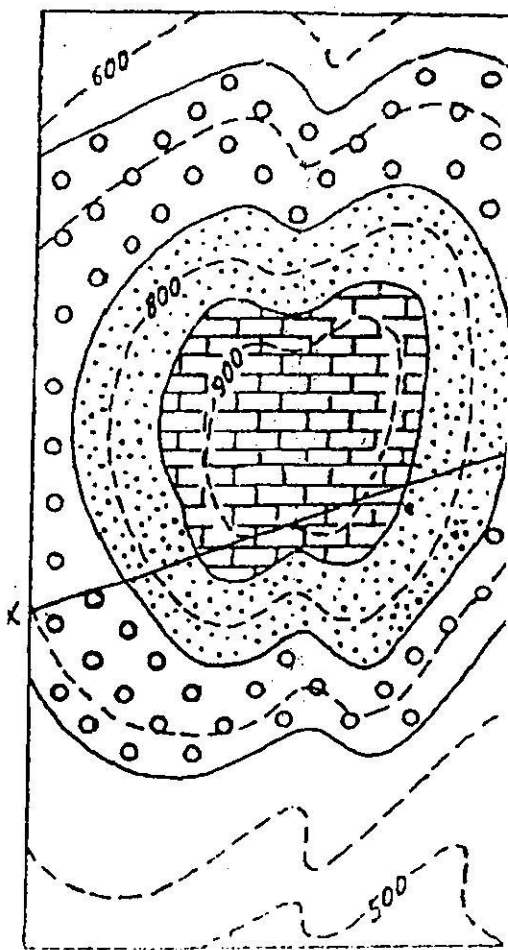



nt.

 Sandstone Mudstone.

Map-A




Limestone


Shale


Sandstone

Map-B

